

KENDRIYA VIDYALAYA BSF DANTIWADA

Summer Vacation (2023-24)

Holiday Homework

Class – V


Maths

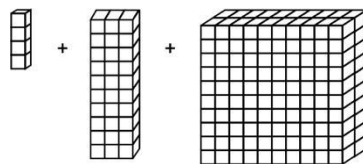
Q 1) Collect date of birth of your 10 friends /relatives and write them in numbers and words. (One example has been done for you)

(If date of birth is 07/12/1982 then 07121982 – Seventy one lakhs twenty one thousand nine hundred eighty two)

Now, Arrange all those numbers in ascending (smallest to biggest) order.

Q 2) Solve the word problems:

- How many minutes are there in 2,700 seconds?
- Mr. Yogi bought 1kg salt, 500g butter, 250g coffee, 2kg dal, 750g tea and 250 gm haldi. What was the total weight of the things he bought?
- The Annual day programme got over at 6:30 p.m. If it was a 4-hour programme, when did it start?
- What will be six and half of SIX AND A HALF THOUSAND?
- If  represents TEN, then given image represents how much?



f) The number that is 100 less than 10000 is _____

4) Make an abacus. (See page no. 2)Q

5) Recite tables from 1 to 20.

Q 6) Angles in numbers. (Make it using matchsticks) (See page no. 3)

7. Solve the learning achievement of chapter – 1 in your holiday homework notebook

Note: 1) You can use your creativity to make an abacus.

2) All the work except an abacus must be completed in file paper/project paper only and make one separate file for maths work submission.


For any query contact your Maths subject teacher.

ABACUS




ABACUS

ONE BEAD
IN UNITS PLACE
DEPICTS 1



ONE BEAD
IN THE MIDDLE
PENCIL DEPICTS
TEN

ABACUS



ONE BEAD IN
THIS PENCIL
DEPICTS
HUNDRED

ABACUS

ANGLES IN NUMBERS

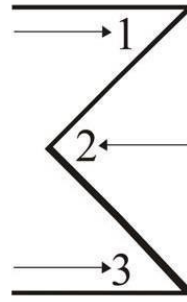


1 angle

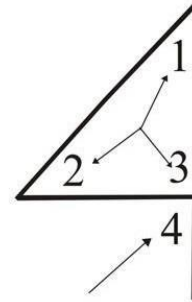


2 angles

Angle in number 1 is only 1 and number 2 is 2

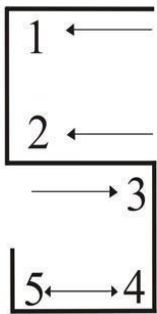


3 angles

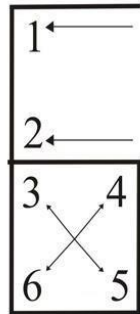


4 angles

Angles in number 3 is 3 and in Number 4 is 4

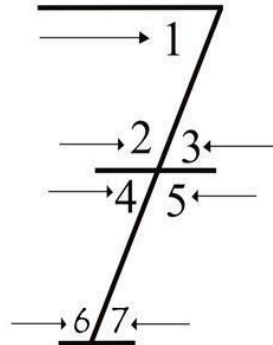


5 angles

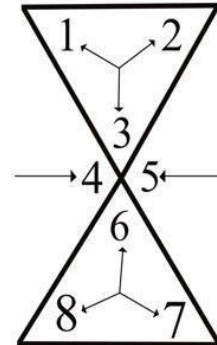


6 angles

Angles in number 5 is 5 and in Number 6 is 6

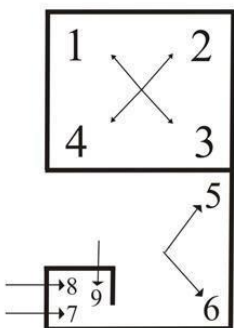


7 angles




8 angles

Angles in number 7 is 7 and in Number 8 is 8



9 angles



0 angle

Angles in number 9 is 9 and in Number 0 is 0

SUBJECT:- ENGLISH

- (1)WRITE ANY 2 POEM OF ENGLISH TEXTBOOK OF CLASS 5 IN YOUR HOMEWORK COPY.
- (2)WRITE A FULL LESSON – WONDERFUL WASTE AS A “HANDWRITNG” IN YOUR HOMEWORK COPY.
- (3)MAKE ONE CHART ON ANY LESSON OF ENGLISH TEXTBOOK LESSON/POEM.
(Long chart paper)
- (4)MAKE “BEST OUT OF WASTE “ USING USELESS THIMGS FROM YOUR HOME.
(Making A Model)
- (5)WRITE 50 NEW WORDS WITH THEIR MEANINGS USING DICTIONARY IN YOUR HOMEWORK COPY.

CLASS -V EVS

1. Collect different types of seeds outside your home.
2. List out the 20 food items that can get Spoilt in short and long period.
3. Observe different seeds,shapes and make a chart.
4. Project: Prepare a model or chart of Digestive system and Tongue also write its importance and functions of it.
5. Make a snake puppet or been.
6. Write Five sentences about :-
a)Sloth b)Snake Charmer

विषय हिंदी

1. “ तिब्बत ” पर अतिरिक्त जानकारी प्राप्त कर लिखिए इससे संबंधित चित्र चिपकाओ ।
2. फसलों के त्योहारों के चित्र चिपकाकर किसी एक त्योहार के बारे में अनुच्छेद लिखिए ।
3. 1 से 100 तक गिनती लिखकर याद करो ।
4. दिए गए संयुक्ताक्षरों से दो दो शब्द लिखिए ।
i) स्य ii) प्य iii) न्ह
iv) ब्व v) म्ह vi) ल्ल
vii) न्न viii) क्क ix) व्य x)त्य
5. गर्मी की छुट्टियां कैसे बिताई -100 एक अनुच्छेद लिखिए ।
6. प्रतिदिन हिंदी में एक अनुच्छेद पढ़े ।